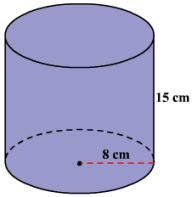


# Volume of a Cylinder

1)  $v = \pi r^2 h$

What values do you know?



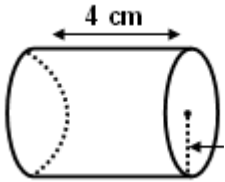
What values are unknown?

---

2)  $v = \pi r^2 h$

What values do you know?

Volume =  $50.24 \text{ cm}^3$



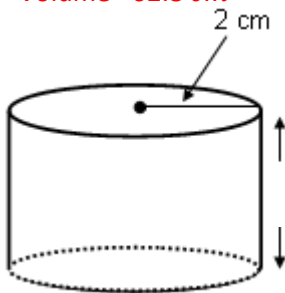
What values are unknown?

---

3)  $v = \pi r^2 h$

What values do you know?

Volume =  $62.8 \text{ cm}^3$



What values are unknown?